


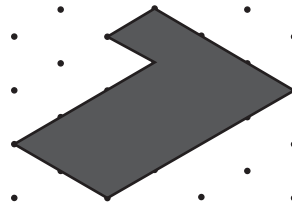



A vos marques ... /2



Des objets constitués d'assemblage de 3 cubes exactement, ont laissé ces empreintes.
Dessine les volumes correspondant au-dessus de chacune d'elles.