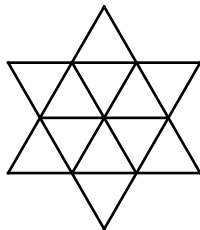


Epreuve 6: (sur 4 points) Trigolo

*Nombre de triangles :*

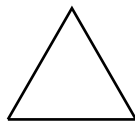
20



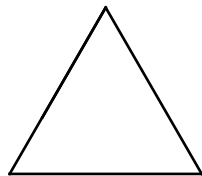
6



3



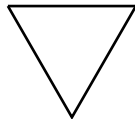
1



6



3



1

