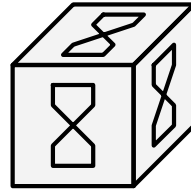
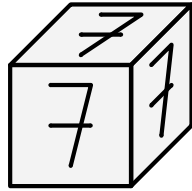
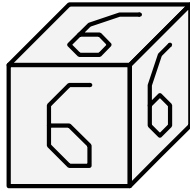

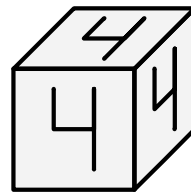
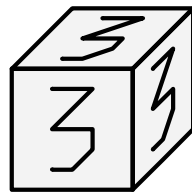
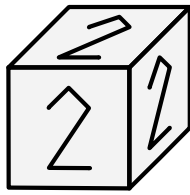



Le cube magique



Comment assembler les huit petits cubes numérotés ci-dessus pour obtenir un Grand cube pour lequel la somme des nombres écrits sur chaque face vaut 18 ? Compléter la figure ci-dessous.

